

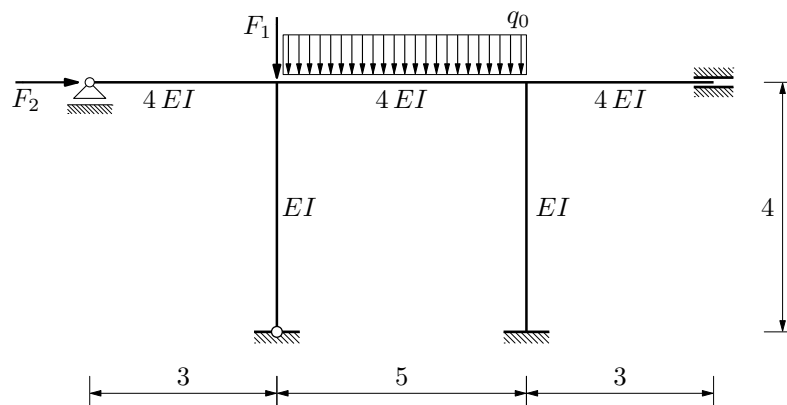
1. (Antić)

Riješite zadani sistem P -DELTA postupkom:

$$EI = 20\,250 \text{ kNm}^2$$

$$q_0 = 50,0 \text{ kN/m'}$$

$$F_1 = 1000,0 \text{ kN}, \quad F_2 = 125,0 \text{ kN}$$



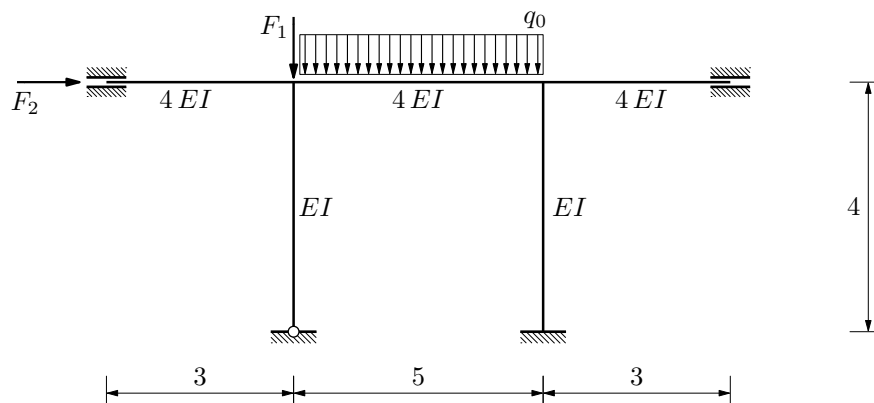
2. (Čelar)

Riješite zadani sistem P -DELTA postupkom:

$$EI = 20\,250 \text{ kNm}^2$$

$$q_0 = 50,0 \text{ kN/m'}$$

$$F_1 = 1000,0 \text{ kN}, \quad F_2 = 125,0 \text{ kN}$$



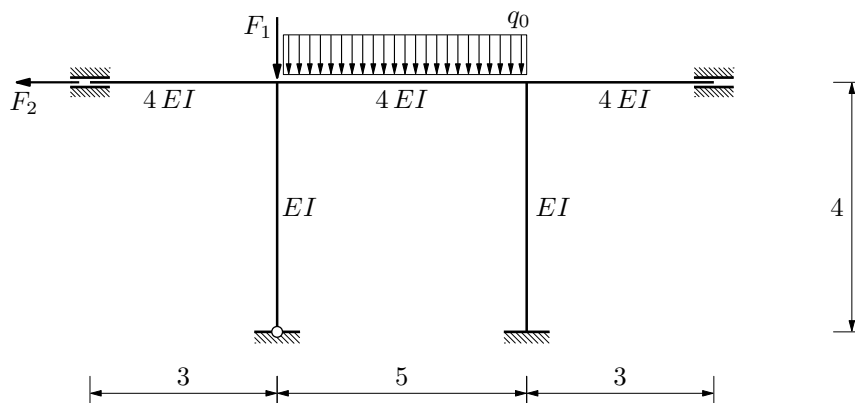
3. (Fabijanić)

Riješite zadani sistem P -DELTA postupkom:

$$EI = 20\,250 \text{ kNm}^2$$

$$q_0 = 50,0 \text{ kN/m'}$$

$$F_1 = 1000,0 \text{ kN}, \quad F_2 = 125,0 \text{ kN}$$



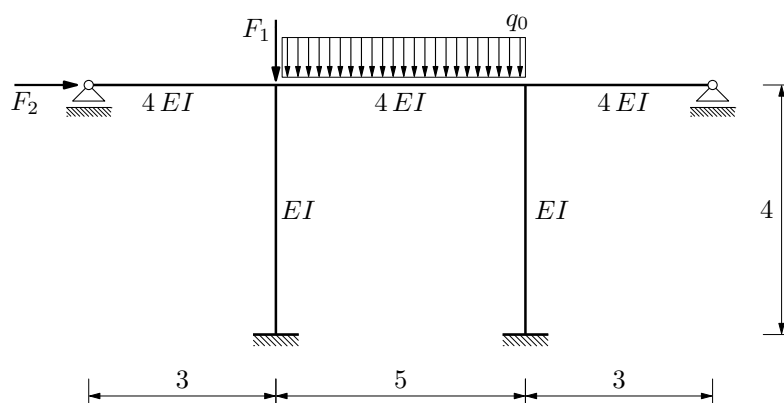
4. (Gunjača)

Riješite zadani sistem P -DELTA postupkom:

$$EI = 20\,250 \text{ kNm}^2$$

$$q_0 = 50,0 \text{ kN/m'}$$

$$F_1 = 1000,0 \text{ kN}, \quad F_2 = 125,0 \text{ kN}$$



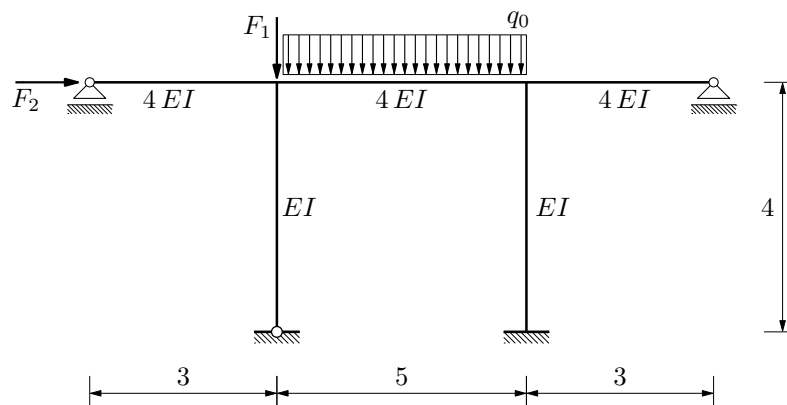
5. (Ivić)

Riješite zadani sistem P -DELTA postupkom:

$$EI = 20\,250 \text{ kNm}^2$$

$$q_0 = 50,0 \text{ kN/m'}$$

$$F_1 = 1000,0 \text{ kN}, \quad F_2 = 125,0 \text{ kN}$$



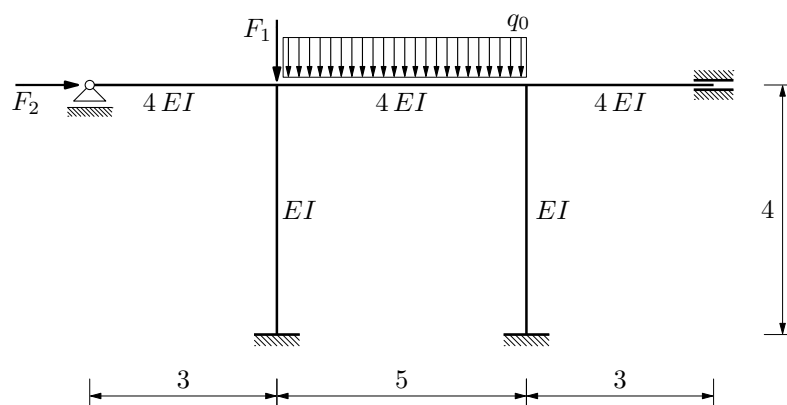
6. (Jajčević)

Riješite zadani sistem P -DELTA postupkom:

$$EI = 20\,250 \text{ kNm}^2$$

$$q_0 = 50,0 \text{ kN/m'}$$

$$F_1 = 1000,0 \text{ kN}, \quad F_2 = 125,0 \text{ kN}$$



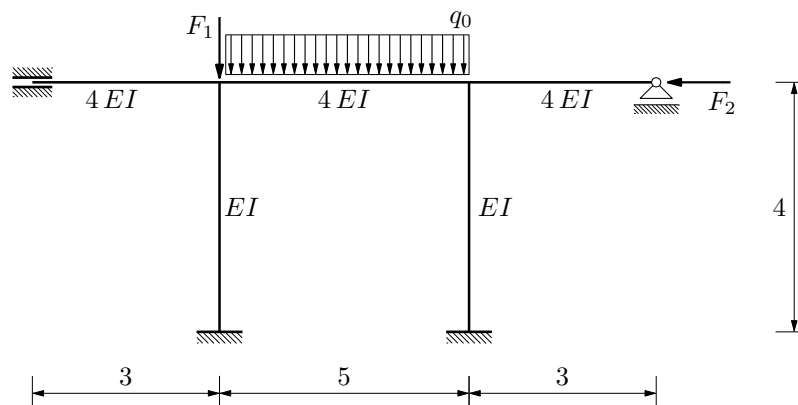
7. (Kirinčić)

Riješite zadani sistem P -DELTA postupkom:

$$EI = 20\,250 \text{ kNm}^2$$

$$q_0 = 50,0 \text{ kN/m'}$$

$$F_1 = 1000,0 \text{ kN}, \quad F_2 = 125,0 \text{ kN}$$



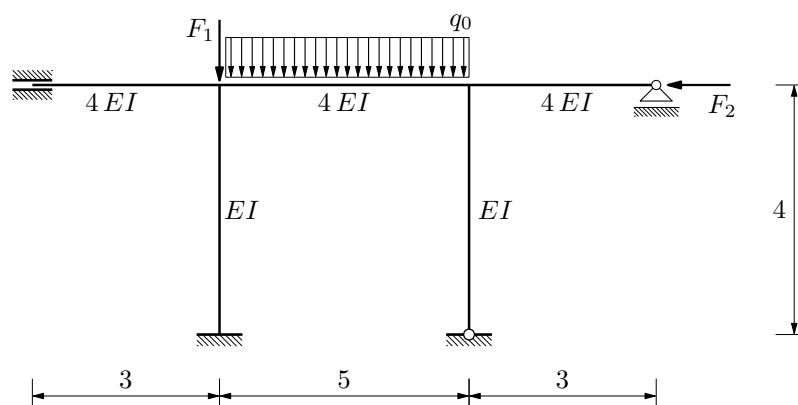
8. (Kopjar)

Riješite zadani sistem P -DELTA postupkom:

$$EI = 20\,250 \text{ kNm}^2$$

$$q_0 = 50,0 \text{ kN/m'}$$

$$F_1 = 1000,0 \text{ kN}, \quad F_2 = 125,0 \text{ kN}$$



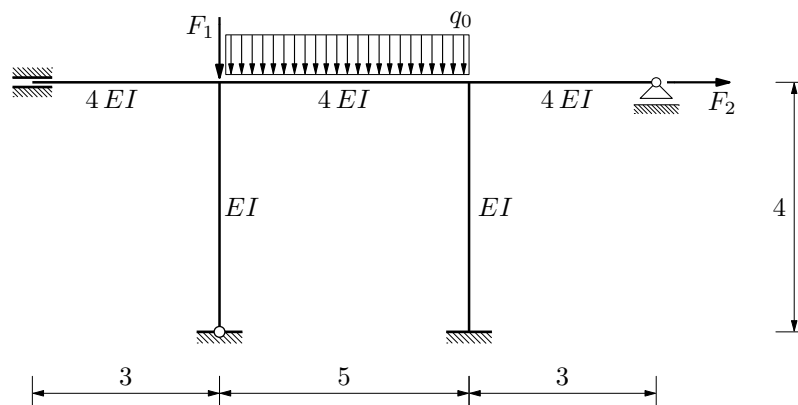
9. (Liška)

Riješite zadani sistem P -DELTA postupkom:

$$EI = 20\,250 \text{ kNm}^2$$

$$q_0 = 50,0 \text{ kN/m'}$$

$$F_1 = 1000,0 \text{ kN}, \quad F_2 = 125,0 \text{ kN}$$



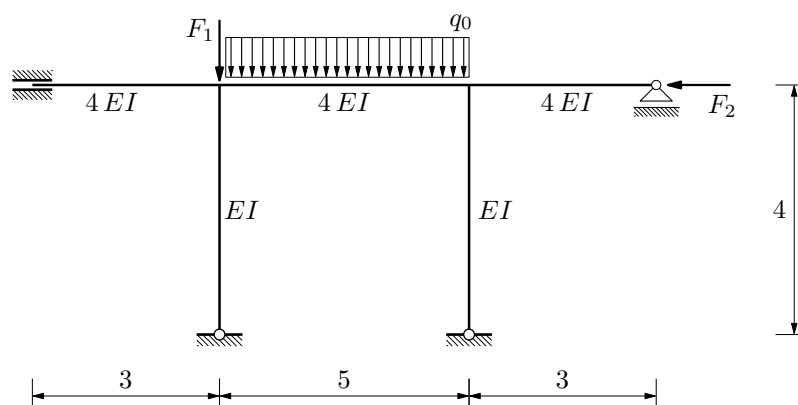
10. (Lovrić)

Riješite zadani sistem P -DELTA postupkom:

$$EI = 20\,250 \text{ kNm}^2$$

$$q_0 = 50,0 \text{ kN/m'}$$

$$F_1 = 1000,0 \text{ kN}, \quad F_2 = 125,0 \text{ kN}$$



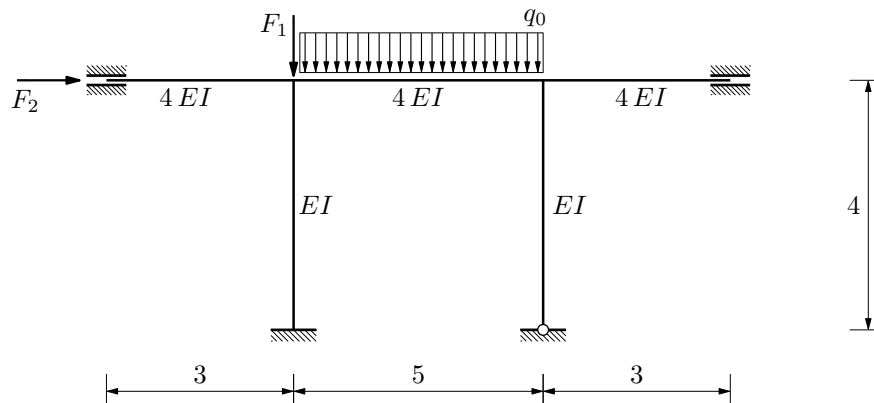
11. (Malkoč)

Riješite zadani sistem P -DELTA postupkom:

$$EI = 20\,250 \text{ kNm}^2$$

$$q_0 = 50,0 \text{ kN/m'}$$

$$F_1 = 1000,0 \text{ kN}, \quad F_2 = 125,0 \text{ kN}$$



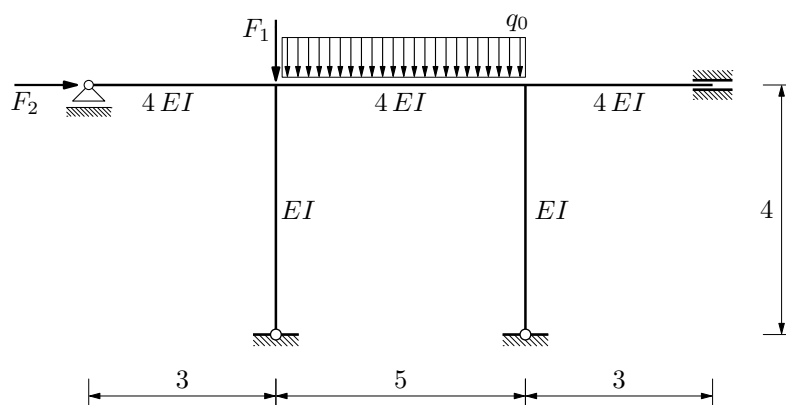
12. (Nasić)

Riješite zadani sistem P -DELTA postupkom:

$$EI = 20\,250 \text{ kNm}^2$$

$$q_0 = 50,0 \text{ kN/m'}$$

$$F_1 = 1000,0 \text{ kN}, \quad F_2 = 125,0 \text{ kN}$$



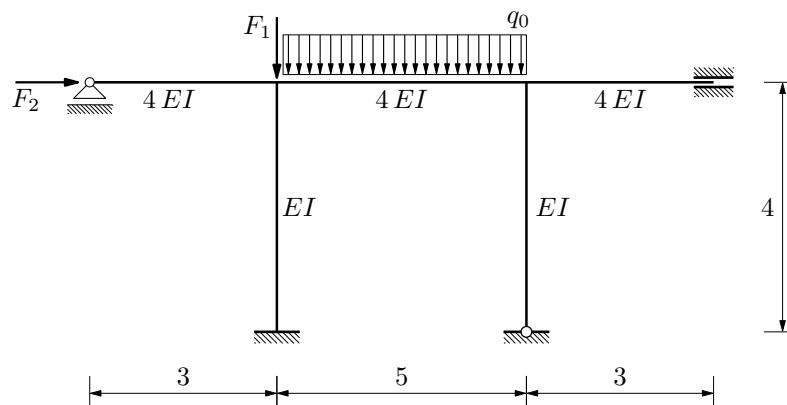
13. (Palajsa)

Riješite zadani sistem P -DELTA postupkom:

$$EI = 20\,250 \text{ kNm}^2$$

$$q_0 = 50,0 \text{ kN/m'}$$

$$F_1 = 1000,0 \text{ kN}, \quad F_2 = 125,0 \text{ kN}$$



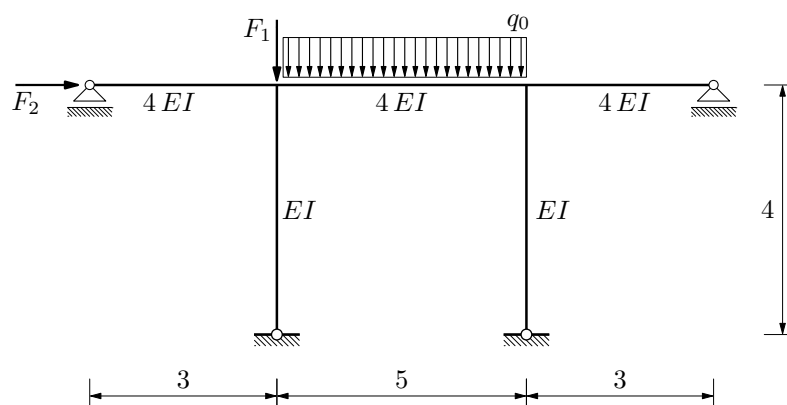
14. (Peronja)

Riješite zadani sistem P -DELTA postupkom:

$$EI = 20\,250 \text{ kNm}^2$$

$$q_0 = 50,0 \text{ kN/m'}$$

$$F_1 = 1000,0 \text{ kN}, \quad F_2 = 125,0 \text{ kN}$$



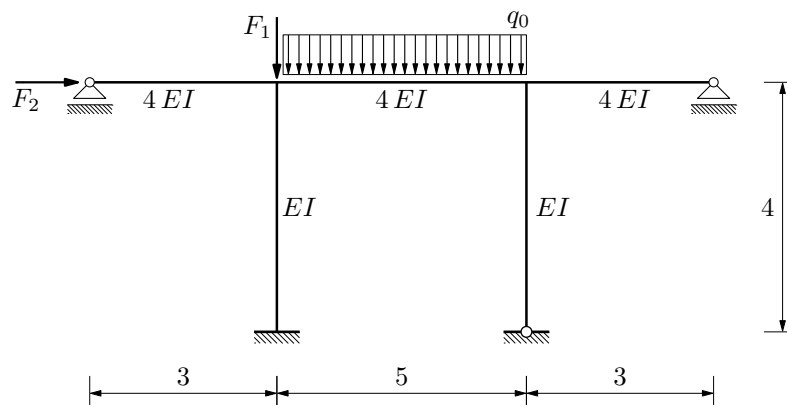
15. (Petrić)

Riješite zadani sistem P -DELTA postupkom:

$$EI = 20\,250 \text{ kNm}^2$$

$$q_0 = 50,0 \text{ kN/m'}$$

$$F_1 = 1000,0 \text{ kN}, \quad F_2 = 125,0 \text{ kN}$$



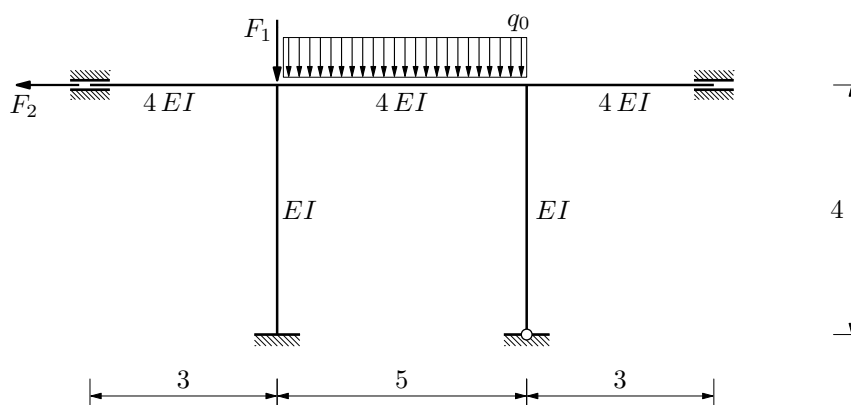
16. (Rodić)

Riješite zadani sistem P -DELTA postupkom:

$$EI = 20\,250 \text{ kNm}^2$$

$$q_0 = 50,0 \text{ kN/m'}$$

$$F_1 = 1000,0 \text{ kN}, \quad F_2 = 125,0 \text{ kN}$$



17. (Vučetić)

Riješite zadani sistem P -DELTA postupkom:

$$EI = 20\,250 \text{ kNm}^2$$

$$q_0 = 50,0 \text{ kN/m'}$$

$$F_1 = 1000,0 \text{ kN}, \quad F_2 = 125,0 \text{ kN}$$

